

**Grade****4****Questions : 50****Total Marks : 100****Duration : 1 Hour****Set****B****General Instructions**

- All questions are compulsory.
- The question paper consists of 50 questions divided into four sections A, B, C and D.  
**Section – A** comprises of **10 Questions of 1 mark** each.  
**Section – B** comprises of **20 Questions of 2 marks** each.  
**Section – C** comprises of **10 Questions of 3 marks** each.  
**Section – D** comprises of **10 Questions of 2 marks** each.
- Use of calculator is not permitted.

**Section - A**

- 
1.  $(20 \div 10) + 3 = ?$   
(a) 30                                      (b) 5                                      (c) 23                                      (d) 13
- 
2. **Keya bought one pencil of Rs. 5 and one pen of Rs. 15. How much did she spend in all ?**  
(a) Rs. 10                                      (b) Rs. 20                                      (c) Rs.25                                      (d) Rs. 15
- 
3. **What is the successor of greatest three digit number ?**  
(a) 1000                                      (b) 999                                      (c) 998                                      (d) 1001
- 
4. **Which is not a prime number ?**  
**2, 3, 5, 7, 12, 13, 17**  
(a) 5                                      (b) 17                                      (c) 12                                      (d) 13
- 
5.  $(18 \div 6) + 3 + 1 = ?$   
(a) 5                                      (b) 8                                      (c) 10                                      (d) 7
- 
6. **Add :  $7570 + 13$**   
(a) 7583                                      (b) 7573                                      (c) 7673                                      (d) 7600

7. Hexagon has \_\_\_\_\_ vertices.  
 (a) 7 (b) 6 (c) 5 (d) 4
- 
8. Which words make this statement true ?  
 Rs. 0.70 \_\_\_\_\_ Rs. 0.30  
 (a) is equal to (b) is less than (c) is greater than (d) None of these
- 
9. To purchase one school bag, Rs. 420 required. Find the cost of two school bags.  
 (a) Rs. 800 (b) Rs. 840 (c) Rs. 820 (d) Rs. 440
- 
10.  $30 - 10 \times 2 = ?$   
 (a) 10 (b) 40 (c) 36 (d) 20

**Section - B**

11.  $10 - 2 \times 3 + 5 + (25 \div 5) = ?$   
 (a) 9 (b) 5 (c) 14 (d) 15
- 
12. The population of Mohali is 137421. What is the number of women, if the number of men is 73928 ?  
 (a) 63493 (b) 73928 (c) 69435 (d) 63394
- 
13. Sonu has Rs.100 cash. He wants to buy chocolates. Each chocolate costs Rs. 5. How many chocolates can he buy ?  
 (a) 10 (b) 15 (c) 20 (d) 25
- 
14. Which number will fit in the box ?  
 $\square - 24 = 51$   
 (a) 24 (b) 75 (c) 36 (d) 51
- 
15.  $(60 \div 6) + 5 \times 2 + 2 = ?$   
 (a) 22 (b) 20 (c) 12 (d) 25



25.  $(55 \div 5) + 5 + 5 \times 5 = ?$

- (a) 65 (b) 55 (c) 26 (d) 41

26. Cost of 250 gm of Gulab Jamun is Rs.70, find the cost of 4 kg Gulab Jamun.

- (a) Rs. 280 (b) Rs. 500 (c) Rs. 1120 (d) Rs. 600

27. A man walks 200 m in 5 minutes. How much distance will be covered in 15 minutes ?

- (a) 300 m (b) 600 m (c) 3000 m (d) 1000 m

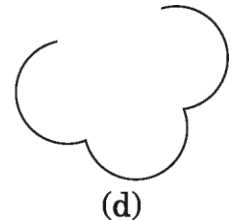
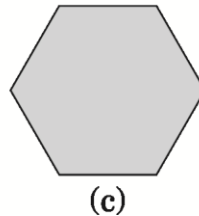
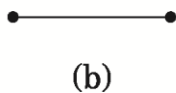
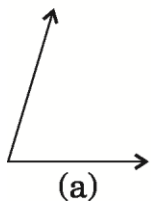
28. 4 hours = \_\_\_\_\_ min.

- (a) 240 (b) 220 (c) 340 (d) 640

29. Leap year has \_\_\_\_\_ days.

- (a) 366 (b) 364 (c) 365 (d) 300

30. Which of the following is a polygon ?



Section - C

31.  $(100 \div 25) + (4 \div 4) + 17 \times 5 = ?$

- (a) 100 (b) 90 (c) 80 (d) 70

32. What is the difference between largest four digit number and smallest four digit number ?

- (a) 9990 (b) 8998 (c) 9100 (d) 8999



**Section - D**

41. 6, 8, 12, 14, 18, 20, 24, ?  
 (a) 25 (b) 26 (c) 28 (d) 30
42. In a certain code 'RISE' is written as 'SJTF' then 'RULE' is written as \_\_\_\_\_.  
 (a) SJMF (b) SVMF (c) STNG (d) TQLE
43. Chalk : Blackboard :: Pen : ?  
 (a) Paper (b) Eraser (c) Pencil (d) Write
44. Arrange the following words in alphabetical order.
- |     |     |      |        |
|-----|-----|------|--------|
| 1   | 2   | 3    | 4      |
| for | few | food | fondly |
- (a) 2413 (b) 2143 (c) 2431 (d) 1243
45. Manish ranks 12th from top in a class of 40 students. What is his rank from the bottom ?  
 (a) 28 (b) 29 (c) 30 (d) 31
46. CF, GJ, KN, OR, ?  
 (a) ST (b) SU (c) WX (d) SV
47. If 'Eraser' is called 'Pencil', 'Pencil' is called 'Marker', 'Marker' is called 'Pen' and 'Pen' is called 'Sharpener', then which thing should be used to write on white board ?  
 (a) Marker (b) Eraser (c) Pen (d) Pencil
48. 2 : 4 :: 5 : ?  
 (a) 25 (b) 12 (c) 6 (d) 9
49. Which alphabet comes exactly in between L and T in alphabet series ?  
 (a) P (b) Q (c) O (d) R
50. Rajat ranked 8th from the top and 38th from the bottom in a class. How many students are there in the class ?  
 (a) 36 (b) 46 (c) 45 (d) 41

\* \* \*